

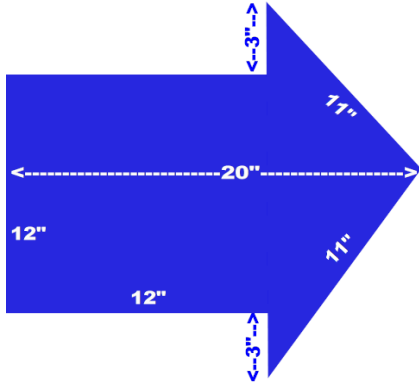
# MasterMath

## Area and Perimeter of Composite Figures

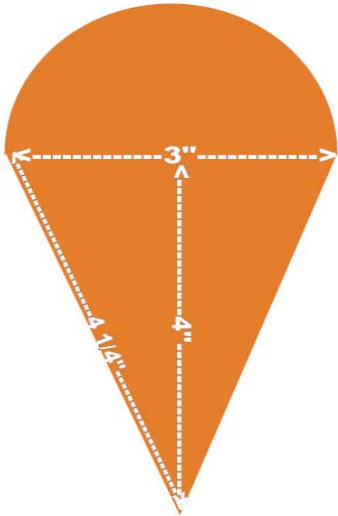
Name \_\_\_\_\_

Date \_\_\_\_\_

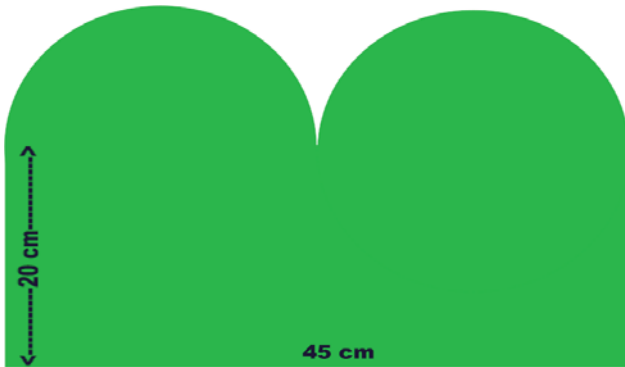
1. Find the Area and the Perimeter of these figures. Indicate the units.




Area	Perimeter
216 sq in	64 in



Area	Perimeter
9.53 sq in	13.21 in



Area	Perimeter
1297.41 sq cm	155.65 cm



Area	Perimeter
60.75 sq ft	45.7 ft