

MasterMath

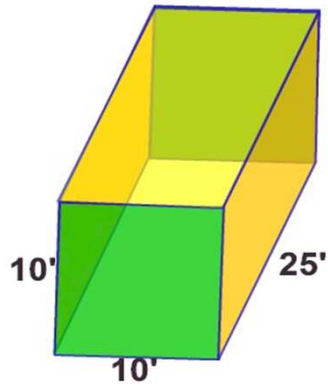
Name _____

Surface Area of a Prism

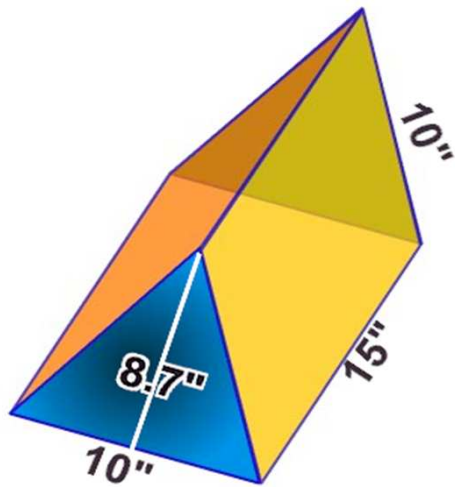
Date _____

1.

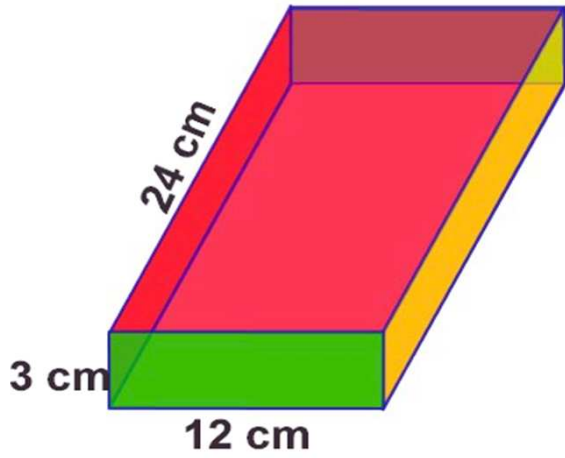
Determine the surface area



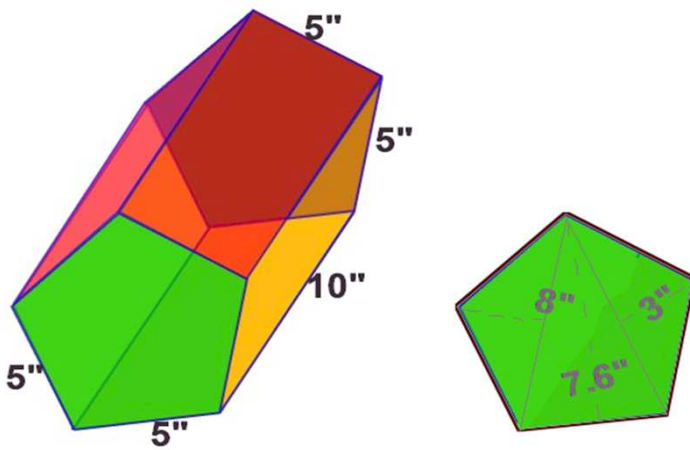
	number	Area of each	Total
bases			
lateral faces			
lateral faces			
total			



	number	Area of each	Total
bases			
lateral faces			
lateral faces			
total			



	number	Area of each	Total
bases			
lateral faces			
lateral faces			
total			



base	number	Area of each	Total
triangle 1			
triangle 2			
Total			

prism	number	Area of	Total
bases			
lateral			
lateral			
total			