

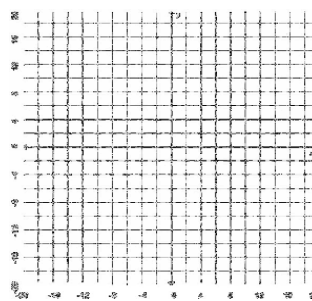
# MasterMath

## Graph Linear Inequalities in Two Variables

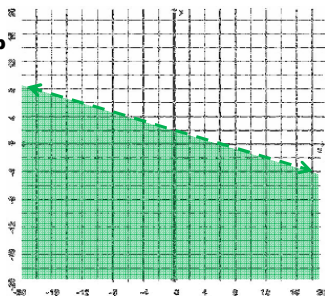
Name \_\_\_\_\_

Date \_\_\_\_\_

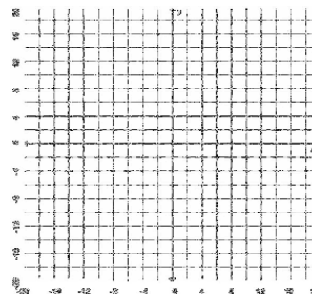
1. Please graph this inequality:  $y > 2x + 6$



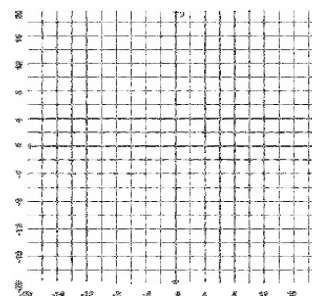
2. Write the Inequality described on this graph



3. Graph this Inequality:  $2y - x \geq -12$



4. Graph  $y < 8$



5. What Inequality is graphed here?

