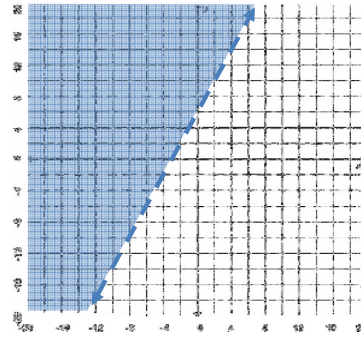


MasterMath

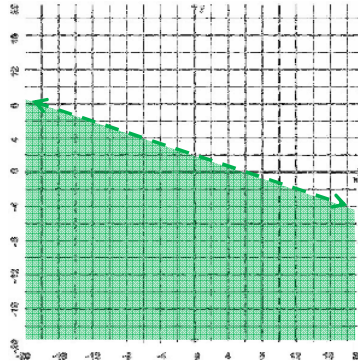
Graph Linear Inequalities in Two Variables

Name _____
Date _____

1. Please graph this inequality: $y > 2x + 6$

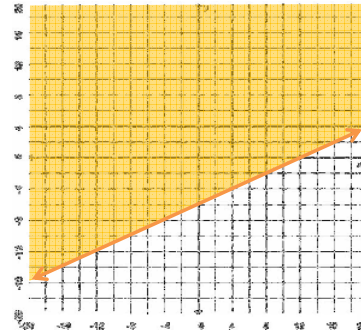


2. Write the Inequality described on this graph

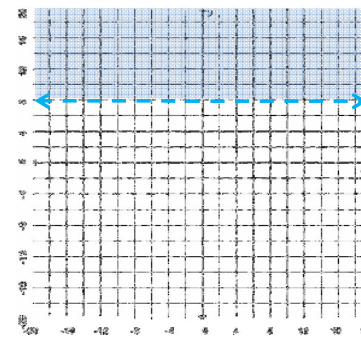


$y < 2 - 3x$

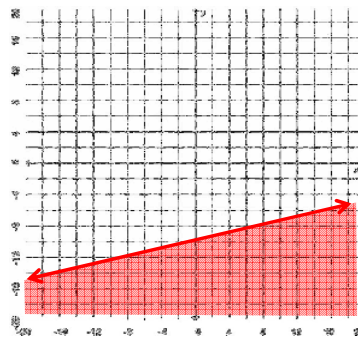
3. Graph this Inequality: $2y - x \geq -12$



4. Graph $y < 8$



5. What Inequality is graphed here?



$y \leq \frac{1}{2}x - 10$